

## SOURCES

Sources 1 to 16: photographs and paintings showing different forms of transport from 1840 to 1900.

Sources 17 and 18: maps of West Sussex in 1843 and 1865.


1. Worthing to London stage coach, c1840



2. Baruch Blaker on his penny farthing bicycle, Worthing, c1880



3. Steam boat off Shoreham-by-Sea, c1900



4. Horse-drawn gig, Wisborough Green, 1896



5. Horse-drawn tram, Shoreham-by-Sea, c1895



6. Bath-chair on Worthing beach, 1849



7. Sailing barge, Fittleworth, c1885



8. Horse-drawn omnibus, Worthing, c1885



## Transport: Activity 1 - Introducing Victorian Transport

9. Sailing ship off  
Shoreham-by-sea, c1860



10. Motor car, Worthing, c1890



11. Horse-drawn brake, Worthing, c1890



12. Men riding bicycles, Worthing, c1900



13. Ferrywoman and passenger on  
River Arun at Bury, c1900



14. Barge at Fittleworth Wharf, 1865



15. Passenger train with steam  
locomotive, Barnham, 1864



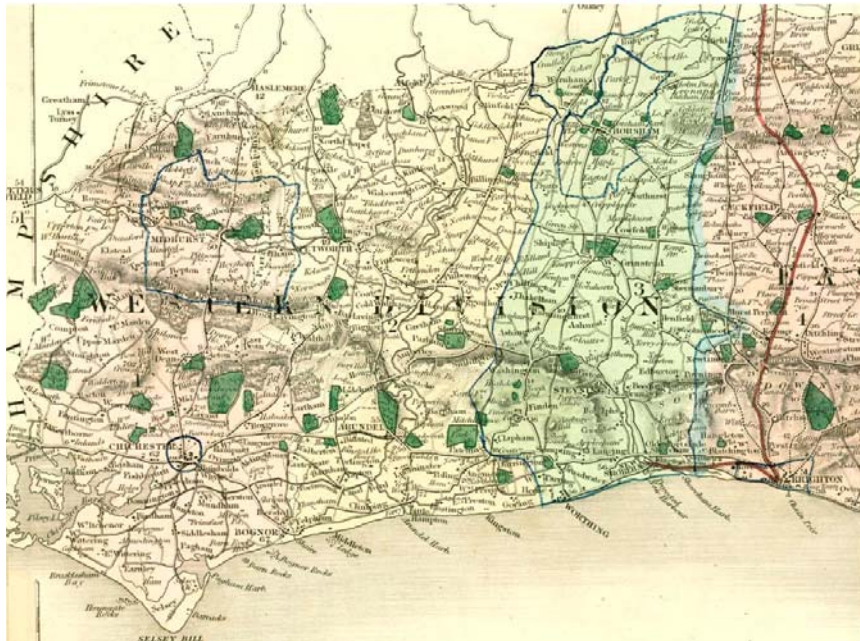
16. Hansom cab in Worthing, c1900



# Transport: Activity 1 - Introducing Victorian Transport

Source 17

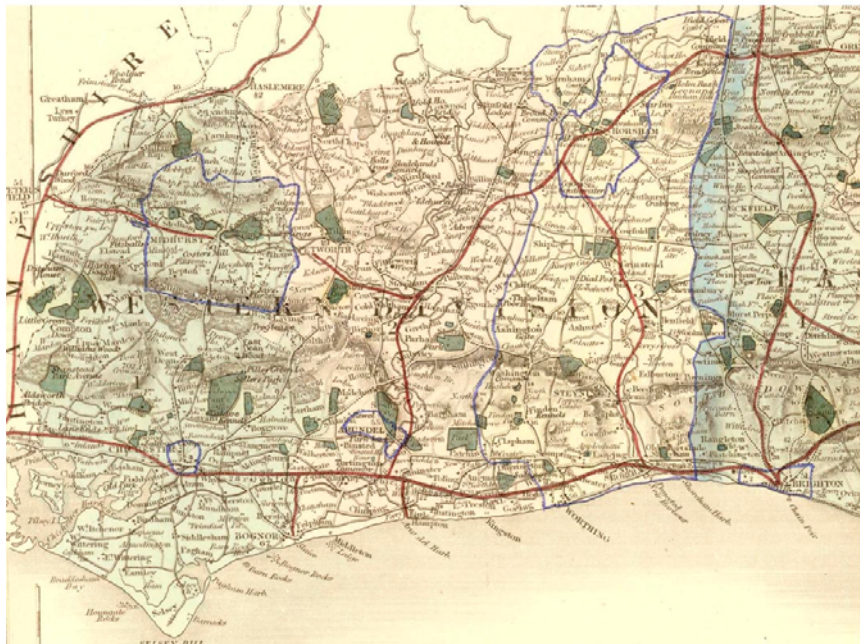
Map showing roads and railways in West Sussex in 1843 - railways are in red



© West Sussex County Council Library Service [MAP\_WSL\_J47]

Source 18

Map showing roads and railways in West Sussex in 1865 - railways are in red



© West Sussex County Council Library Service [MAP\_WSL\_K(a)15]

**ACTIVITY**

1- From the photographs and paintings, list as many different kinds of Victorian transport as you can.

2-What different sorts of power were used to move the transport shown in the sources?

## Transport: Activity 1 - Introducing Victorian Transport

3- Put the pictures in timeline order of when you think the transport was first used. starting with the earliest.

4-What do the red lines on the maps tell us about the railways in Sussex between 1843 and 1865?